

Environmental Composition Book



Division of Fish and Wildlife

Dept. of Planning and Natural Resources

Government of the U.S.V.I.

Learning through nature for K-3.






Name:

School:


Grade:

Counting Fish

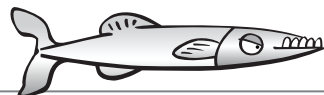



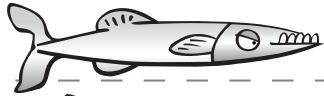

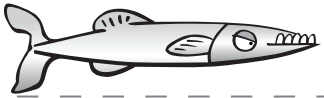
Count. Write how many.



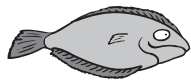
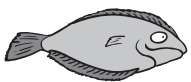
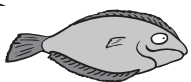
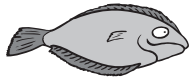
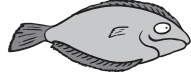
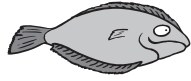
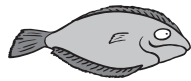
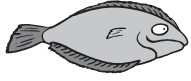
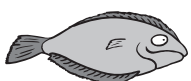
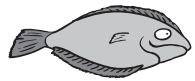
=



=



=









=



=




Counting Fish

2





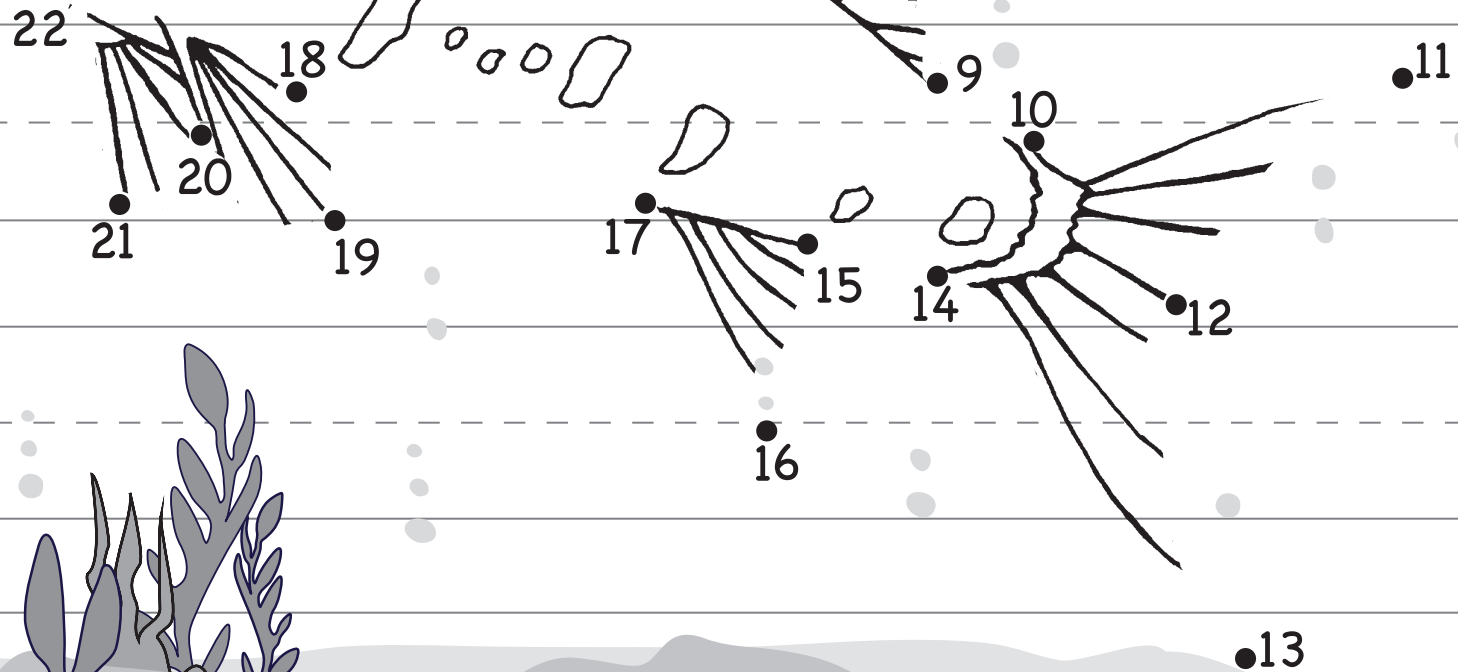
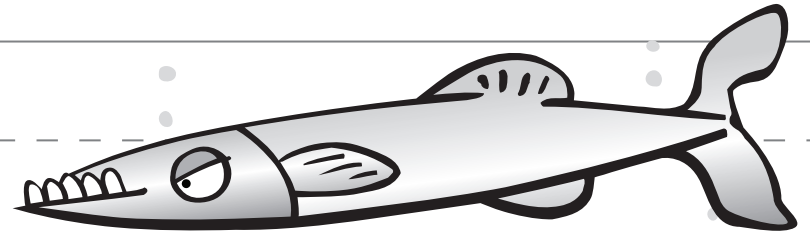
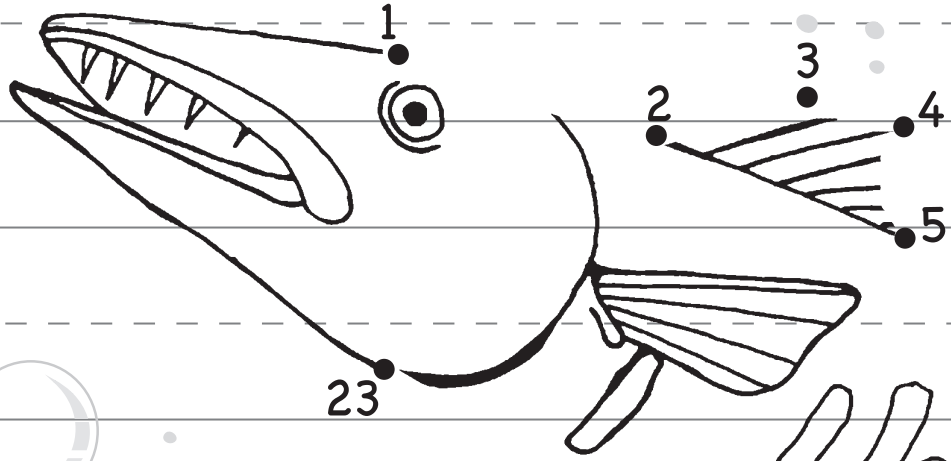
Count.

Write how many.





Connect the dots.



Draw the Barracuda.







Add Fish



Write the total.⁴



$$\begin{array}{r} 4 \\ + 3 \\ \hline \hline \text{total} \end{array}$$


$$\begin{array}{r} 5 \\ + 7 \\ \hline \hline \text{total} \end{array}$$


$$\begin{array}{r} 2 \\ + 3 \\ \hline \hline \text{total} \end{array}$$



$$\begin{array}{r} 7 \\ + 4 \\ \hline \hline \text{total} \end{array}$$


$$\begin{array}{r} 5 \\ + 9 \\ \hline \hline \text{total} \end{array}$$


$$\begin{array}{r} 6 \\ + 3 \\ \hline \hline \text{total} \end{array}$$


Subtract Fish

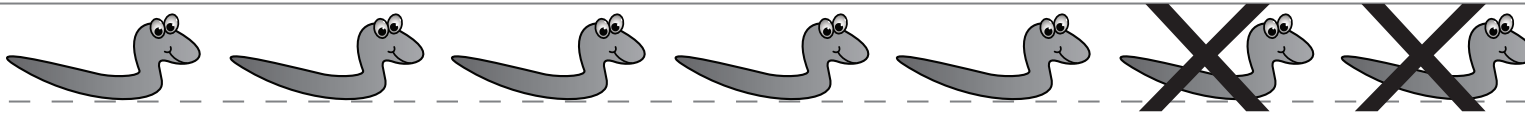
Write the total.




How many are left? $9 - 3 =$




How many are left? $10 - 6 =$



How many are left? $7 - 2 =$



How many are left? $8 - 4 =$



How many are left? $6 - 3 =$



PRESERVE

Fish Habitats • Nursery Grounds
Wave Buffers • Coral Reefs

SAVE THE

Black Mangrove • White Mangrove
Red Mangrove • Buttonwood
FORESTS!

PROTECT THE VIRGIN ISLANDS ENVIRONMENT

Practice the Alphabet

Aa

Ff

Bb

Gg

Cc

Hh

Dd

Jj

Ee

Kk

Ll

Qq

Mm

Rr

Nn

Ss

Oo

Tt

Pp

Uu

Vv


Ww

Xx

Yy

Zz

Protect Saltponds!



Nature's Water Pollution Prevention System

PROTECT THE VIRGIN ISLANDS ENVIRONMENT

Be kind to the coral
They are animals too



Protect our reefs!

HELP PROTECT THE U.S. VIRGIN ISLANDS ENVIRONMENT


CALL D.P.N.R.,

DIVISION OF FISH & WILDLIFE

St. Thomas/St. John 340-775-6762 • St. Croix 340-772-1955

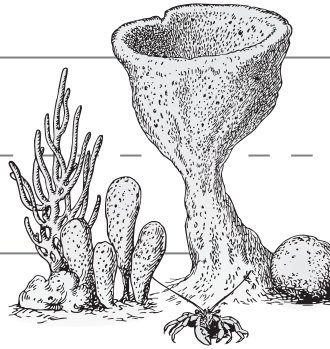
Practice Words

Fish:



Mangroves:


Coral:



Seagrass:

Reefs:

Animal:



Pollution:

Ocean:


Saltpond:

Recycle:




Put the right words in each sentence: protection plastic
animals pollution seagrass reefs future runoff three two

Turtles eat _____



Fish for the _____



Protect our coral _____



There are _____ types of

Mangroves.

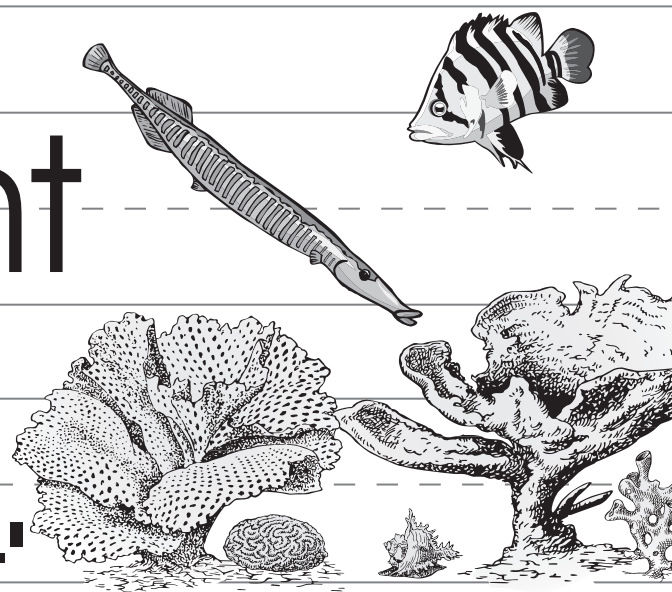
There are ____ types of coral.

Mangroves are help with

land ____.

Saltponds prevent

____.



Don't throw _____
overboard.

Coral are _____ too.

Plants also need

Answers

Turtles eat seagrass.

Fish for the future.

Protect our coral reefs.

There are three types
of Mangroves

Subtract Fish

Write the total.

 $9 - 3 = 6$

 $10 - 6 = 4$

 $7 - 2 = 5$

 $8 - 4 = 4$

 $6 - 3 = 3$

There are two types of coral.

Mangroves are help

with land runoff.

Saltponds prevent

pollution.

Don't throw plastic
overboard.

Coral are animals too.



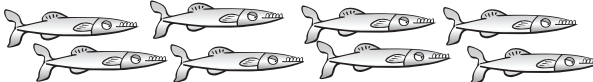




Plants also need

protection.

Answers






Counting Fish

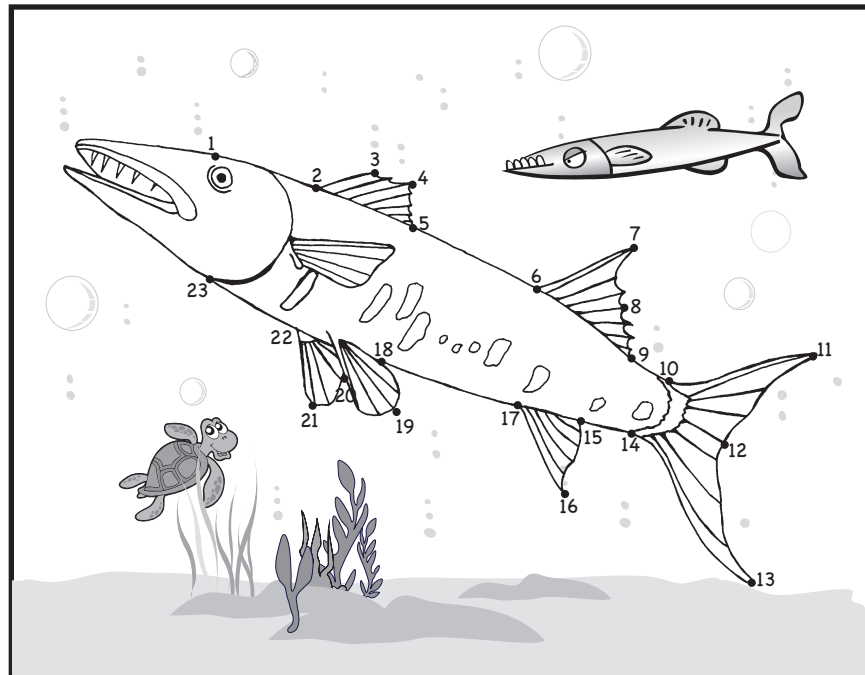
Count. Write how many.

	= 5
	= 7
	= 8
	= 3
	= 10
	= 8
	= 4

Counting Fish



Count.
Write how many.

	= 5
	= 6
	= 3
	= 1
	= 2



Add & Subtract Fish

Write the total.

$$\begin{array}{r} 4 \text{  } \\ + 3 \text{  } \\ \hline 7 \text{ total} \end{array}$$

$$\begin{array}{r} 5 \text{  } \\ + 7 \text{  } \\ \hline 12 \text{ total} \end{array}$$

$$\begin{array}{r} 2 \text{  } \\ + 3 \text{  } \\ \hline 5 \text{ total} \end{array}$$

$$\begin{array}{r} 7 \text{  } \\ + 4 \text{  } \\ \hline 11 \text{ total} \end{array}$$

$$\begin{array}{r} 5 \text{  } \\ + 9 \text{  } \\ \hline 14 \text{ total} \end{array}$$

$$\begin{array}{r} 6 \text{  } \\ + 3 \text{  } \\ \hline 9 \text{ total} \end{array}$$

